




NAME \_\_\_\_\_

DATE \_\_\_\_\_

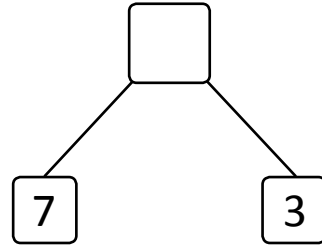
# NUMBER BOND

Complete the number bond and number sentences to match the picture.




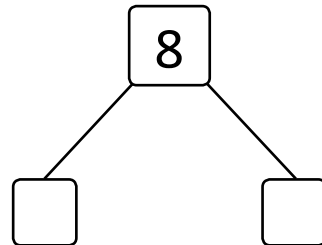
$$\boxed{7} + \boxed{3} = \boxed{\phantom{00}}$$

$$\boxed{3} + \boxed{\phantom{00}} = \boxed{10}$$



$$\boxed{5} + \boxed{3} = \boxed{\phantom{00}}$$

$$\boxed{\phantom{00}} + \boxed{5} = \boxed{8}$$



$$\boxed{4} + \boxed{\phantom{00}} = \boxed{7}$$

$$\boxed{3} + \boxed{\phantom{00}} = \boxed{7}$$

