



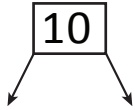
NAME _____

DATE _____

ADDING THREE NUMBERS

Circle the numbers that make ten. Draw a picture and complete the number sentences.

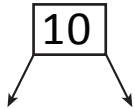
1) $9 + 2 + 8 = \square$



___ + ___ + ___

$\boxed{10} + _ = _$

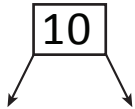
2) $6 + 3 + 7 = \square$



___ + ___ + ___

$\boxed{10} + _ = _$

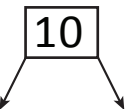
3) $6 + 4 + 1 = \square$



___ + ___ + ___

$\boxed{10} + _ = _$

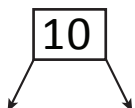
4) $3 + 1 + 9 = \square$



___ + ___ + ___

$\boxed{10} + _ = _$

5) $8 + 2 + 5 = \square$



___ + ___ + ___

$\boxed{10} + _ = _$