



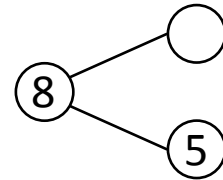
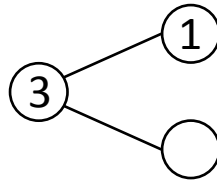
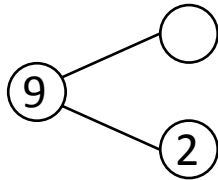
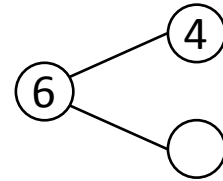
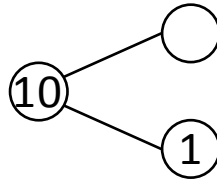
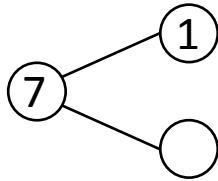
NAME _____

DATE _____

ADDITIONS (USING NUMBER BONDS)

Complete the number bonds.

1)



Fill in the missing numbers that make the number sentences true.

$9 + 1 = \underline{\quad}$

$1 + \underline{\quad} = 3$

$3 + 5 = \underline{\quad}$

$7 + \underline{\quad} = 9$

$4 + 2 = \underline{\quad}$

$\underline{\quad} + 2 = 6$

$1 + 2 = \underline{\quad}$

$\underline{\quad} + 1 = 10$

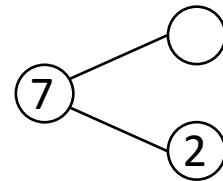
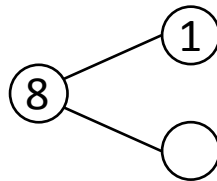
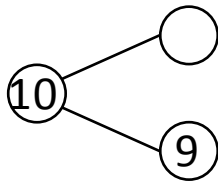
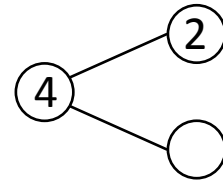
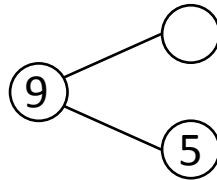
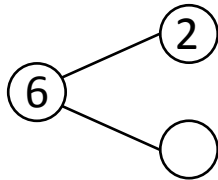
$1 + 6 = \underline{\quad}$

$3 + \underline{\quad} = 8$

$7 + 2 = \underline{\quad}$

$\underline{\quad} + 6 = 7$

2)



Fill in the missing numbers that make the number sentences true.

$1 + 7 = \underline{\quad}$

$\underline{\quad} + 4 = 6$

$4 + 5 = \underline{\quad}$

$1 + \underline{\quad} = 10$

$2 + 2 = \underline{\quad}$

$4 + \underline{\quad} = 9$

$2 + 4 = \underline{\quad}$

$\underline{\quad} + 7 = 8$

$1 + 9 = \underline{\quad}$

$5 + \underline{\quad} = 7$

$5 + 2 = \underline{\quad}$

$\underline{\quad} + 2 = 4$