



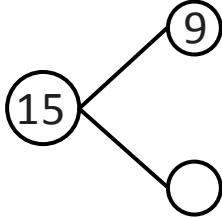
NAME _____

DATE _____

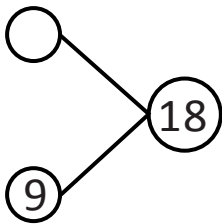
ADDITION NUMBER SENTENCES

Solve the number bond and write the number sentence with answer you got as shown in the example.

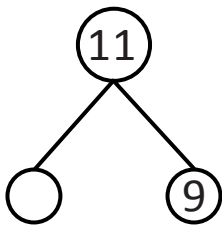
1)



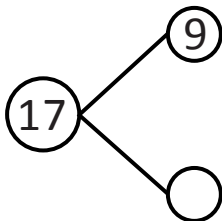
2)



3)



4)



5)

