



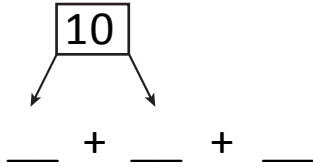
NAME _____

DATE _____

ADDING THREE NUMBERS

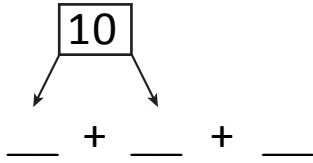
Circle the numbers that make ten. Draw a picture and complete the number sentences.

1) $3 + 5 + 5 = \square$



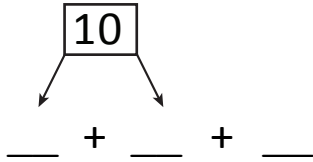
$\boxed{10} + _ = _$

2) $2 + 7 + 3 = \square$



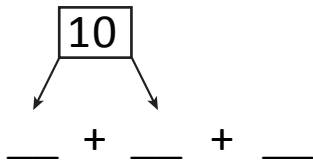
$\boxed{10} + _ = _$

3) $4 + 4 + 6 = \square$



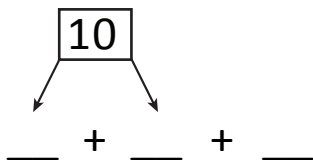
$\boxed{10} + _ = _$

4) $8 + 8 + 2 = \square$



$\boxed{10} + _ = _$

5) $6 + 6 + 4 = \square$



$\boxed{10} + _ = _$