



NAME _____ DATE _____


NUMBER BOND

Problem solving questions basing on thinking and understanding.

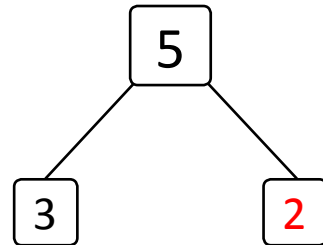
Example:

Andrew was given a total of 5 pencils for his birthday. Draw more pencils to show the total number of pencils given to Andrew for his birthday.

How many pencils did you have to draw 2 pencils.




$$\boxed{5} = \boxed{3} + \boxed{2}$$



1) Jacob and Jill were baking cookies. They made 3 round cookies and then made some heart cookies. They made 9 cookies altogether. How many heart cookies did they make? Draw and count on to show the story.

How many heart cookies did you have to draw ___.



$$\boxed{3} + \boxed{} = \boxed{9}$$

