

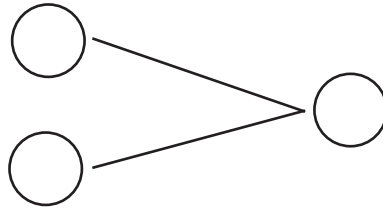


NAME _____ DATE _____

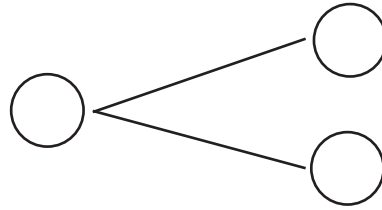
ADDITIONS

Complete the addition sentences and fill the number bond.

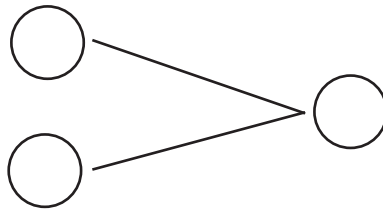
1) $6 + 9 = \underline{\quad}$



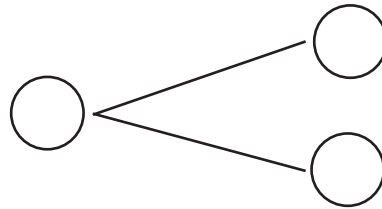
2) $4 + 9 = \underline{\quad}$



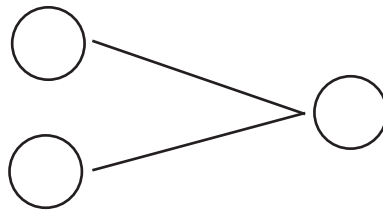
3) $9 + 3 = \underline{\quad}$



4) $1 + 9 = \underline{\quad}$



5) $10 + 3 = \underline{\quad}$



6) $2 + 9 = \underline{\quad}$

