




NAME \_\_\_\_\_

DATE \_\_\_\_\_

## NUMBER BOND

Problem solving questions basing on thinking and understanding.

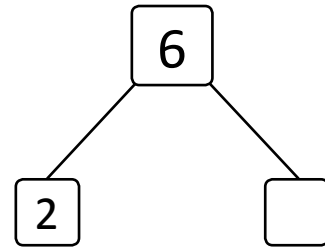
- 1) Jack has 2 cars. His friend Jane came over with some more. Together they had 6 cars. How many cars did Jane bring over?




Jane brought over \_\_\_ cars.

Write a number sentences to explain the story.

$$\boxed{2} + \boxed{\phantom{0}} = \boxed{6}$$



- 2) Draw more balloons to show that Jack has 5 balloons total.



I add \_\_\_ more balloons.

Write a number sentences to show how many balloons you draw.

$$\boxed{3} + \boxed{\phantom{0}} = \boxed{5}$$

$$\boxed{2} + \boxed{\phantom{0}} = \boxed{5}$$

