

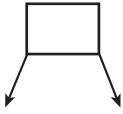


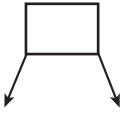
NAME _____

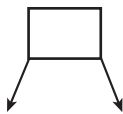
DATE _____

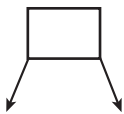
ADDING THREE NUMBERS

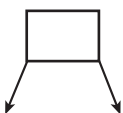
Circle the numbers that make ten. Put them into a number bond and solve.

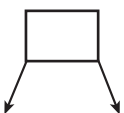
1) 
 $1 + 9 + 9 = \underline{\quad}$

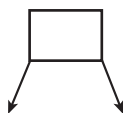
7) 
 $3 + 7 + 4 = \underline{\quad}$

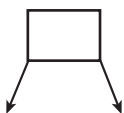
2) 
 $8 + 2 + 3 = \underline{\quad}$

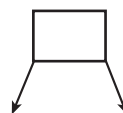
8) 
 $4 + 6 + 7 = \underline{\quad}$

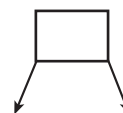
3) 
 $7 + 3 + 6 = \underline{\quad}$

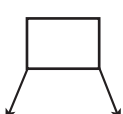
9) 
 $5 + 5 + 6 = \underline{\quad}$

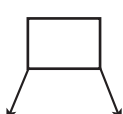
4) 
 $1 + 7 + 3 = \underline{\quad}$

10) 
 $4 + 6 + 3 = \underline{\quad}$

5) 
 $3 + 1 + 9 = \underline{\quad}$

11) 
 $2 + 5 + 5 = \underline{\quad}$

6) 
 $7 + 3 + 5 = \underline{\quad}$

12) 
 $7 + 2 + 8 = \underline{\quad}$