



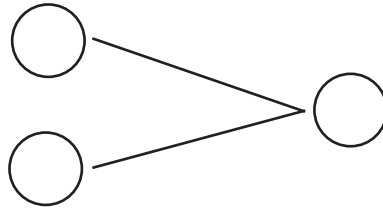
NAME \_\_\_\_\_

DATE \_\_\_\_\_

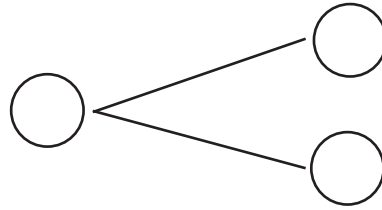
## ADDITIONS

Complete the addition sentences and fill the number bond.

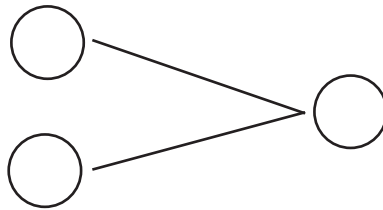
1)  $7 + 9 = \underline{\quad}$



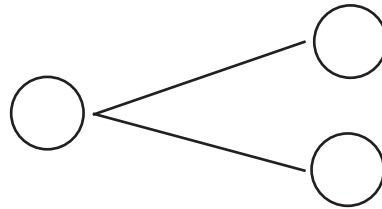
2)  $1 + 10 = \underline{\quad}$



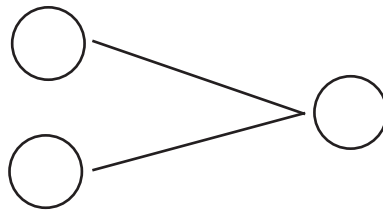
3)  $5 + 9 = \underline{\quad}$



4)  $9 + 1 = \underline{\quad}$



5)  $10 + 7 = \underline{\quad}$



6)  $4 + 10 = \underline{\quad}$

