

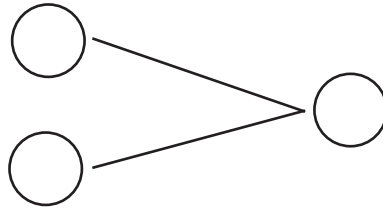


NAME _____ DATE _____

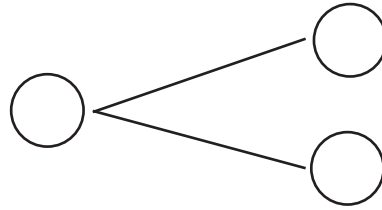
ADDITIONS

Complete the addition sentences and fill the number bond.

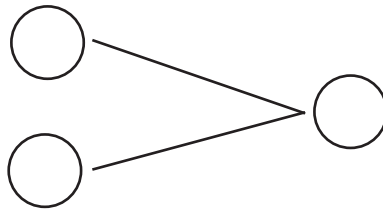
1) $9 + 6 = \underline{\quad}$



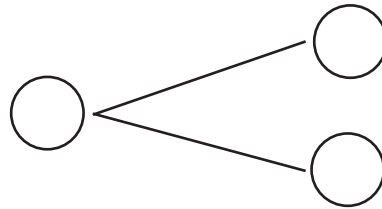
2) $9 + 2 = \underline{\quad}$



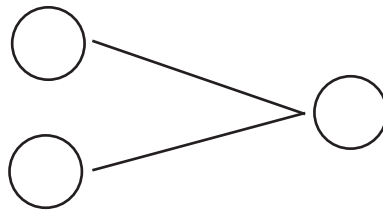
3) $10 + 5 = \underline{\quad}$



4) $9 + 4 = \underline{\quad}$



5) $2 + 10 = \underline{\quad}$



6) $8 + 10 = \underline{\quad}$

