



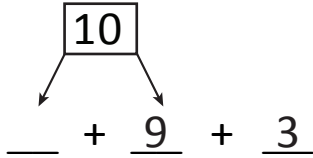
NAME _____

DATE _____

ADDING THREE NUMBERS

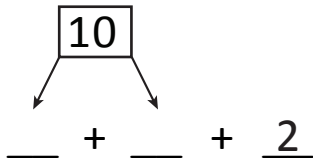
Draw a picture and complete the number sentences.

1) $1 + 9 + 3 = \underline{\quad}$



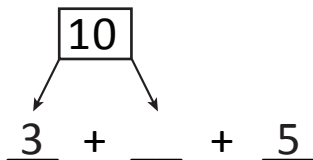
$10 + \underline{\quad} = \underline{\quad}$

2) $6 + 4 + 2 = \underline{\quad}$



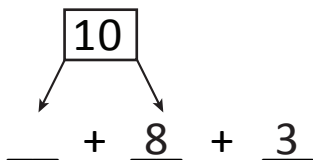
$10 + \underline{\quad} = \underline{\quad}$

3) $3 + 7 + 5 = \underline{\quad}$



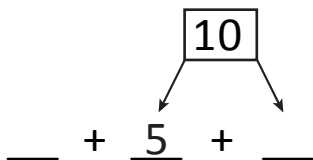
$10 + \underline{\quad} = \underline{\quad}$

4) $2 + 8 + 3 = \underline{\quad}$



$10 + \underline{\quad} = \underline{\quad}$

5) $2 + 5 + 5 = \underline{\quad}$



$10 + \underline{\quad} = \underline{\quad}$