



NAME \_\_\_\_\_

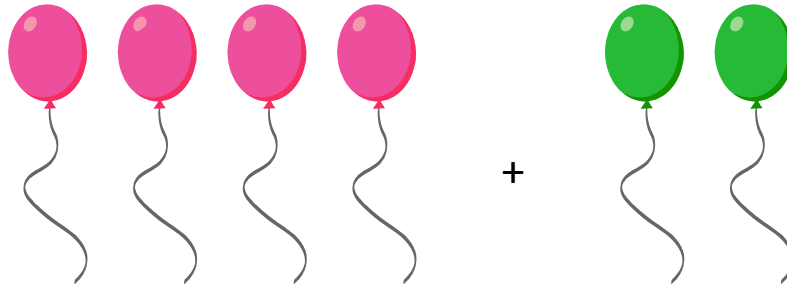
DATE \_\_\_\_\_

# NUMBER BOND

Addition word problems using number bonds.

Example:

Use the picture to tell a math story.

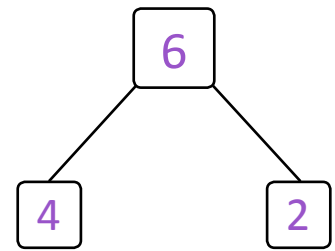


$$\boxed{4} + \boxed{2} = \boxed{6}$$


There are 4 pink balloons.

There are 2 green balloons.

Altogether, there are 6 balloons.



1) Use the picture to tell a math story.



$$\boxed{\phantom{0}} + \boxed{\phantom{0}} = \boxed{\phantom{0}}$$

There are \_\_\_ yellow flowers.

There are \_\_\_ pink flowers.

Altogether, there are \_\_\_ flowers.

