



NAME _____

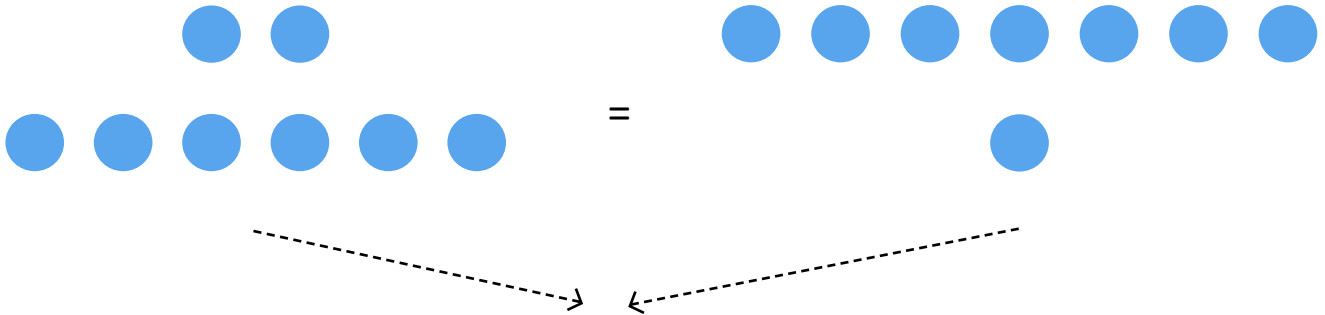
DATE _____

ADDITION WORD PROBLEMS

Giving proofs to the reasoning questions.

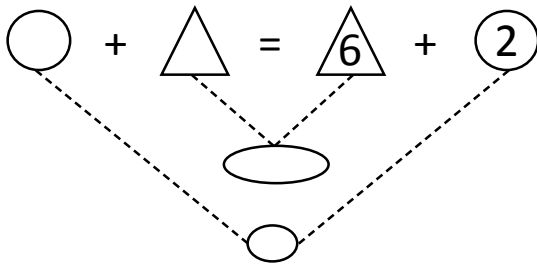
1) Kasim says when the unknown is 7, It makes the number sentence true $2 + 6 = \underline{\quad} + 1$. Amir says she is wrong. He says 8 makes the number sentence true?

a) Who is correct ? Explain your thinking using pictures, words or numbers.

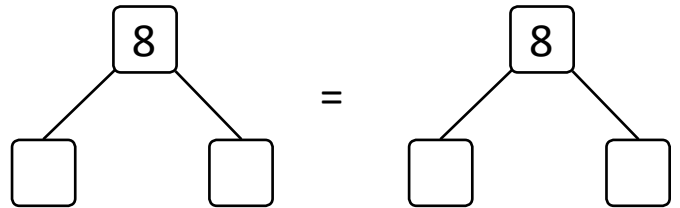


Kasim is right because they are equal.

b) Kasim says that 2 and 6 is equal to 6 and 2. Amir says she is wrong again. Explain who is correct, using pictures, numbers or words.

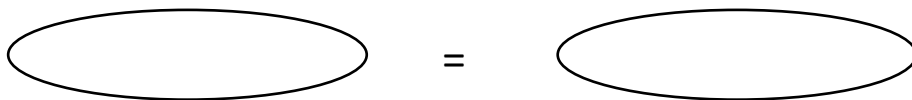


___ + ___ = ___ + ___



Mary is correct.

c) Next Kasim tells Amir $7 = 7$. Amir says he is wrong again. Explain who is correct, using pictures, numbers or words.



Kasim is correct. Its true!

d) Amir decided to share 9 carrot sticks with her friend Kasim. Amir put 3 carrot sticks in her plate, and some more on the table. How many carrot sticks did Amir put on the table?

