



NAME \_\_\_\_\_

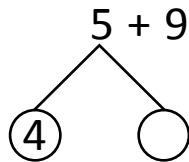
DATE \_\_\_\_\_

## WORD PROBLEMS

Make a ten to add with in 20.

1) Jasmine counted 5 pigeons and 9 sparrows on her way to school? Cataria counted 7 pigeons and 8 sparrows on her way to school?

a) How many birds Jasmine counted?



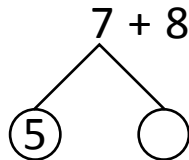
$$\therefore 5 + 9 = \underline{\quad}$$

Jasmine counted      birds.

$$9 + \underline{\quad} = 10$$

$$10 + 4 = \underline{\quad}$$

b) How many birds Cataria counted?



$$\therefore 7 + 8 = \underline{\quad}$$

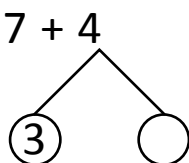
Cataria counted      birds.

$$8 + \underline{\quad} = 10$$

$$10 + 5 = \underline{\quad}$$

2) Elise has 7 black pencils and 4 red pencils. Karla has 9 black pencils and 7 red pencils.

a) How many pencils Elise have?



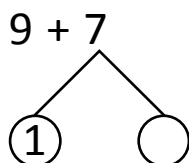
$$\therefore 7 + 4 = \underline{\quad}$$

Elise has      pencils.

$$7 + 3 = 10$$

$$10 + \underline{\quad} = \underline{\quad}$$

b) How many pencils Karla have?



$$\therefore 9 + 7 = \underline{\quad}$$

Karla has      pencils.

$$9 + 1 = 10$$

$$10 + \underline{\quad} = \underline{\quad}$$