



NAME _____

DATE _____

ADDITION SENTENCES

Questions based on thinking and understanding.

- 1) There are 12 mangoes to a tree. 3 mangoes fell down. How many mangoes does the tree have?



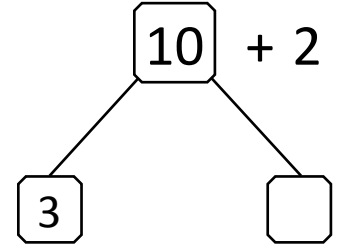
$$\boxed{7} + \boxed{9} = \boxed{}$$



$$\boxed{12} = \boxed{3} + \boxed{?}$$




$$\boxed{12} = \boxed{3} + \boxed{}$$




Remaining mangoes to a tree ___.

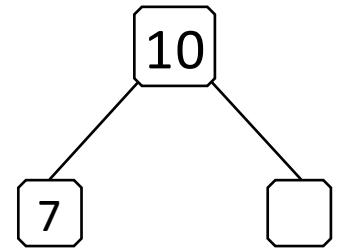

- 2) There are 10 books. Sheela read 7 books. How many books she would yet to be read?



$$\boxed{10} = \boxed{7} + \boxed{?}$$



$$\boxed{10} = \boxed{7} + \boxed{}$$



She would yet to be read ___.

- 3) There are twelve oranges in a basket. The merchant sold 8 oranges. How many oranges are now in the basket?



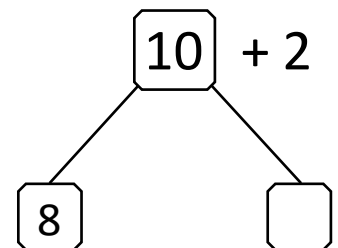
$$\boxed{2} + \boxed{2} = \boxed{}$$



$$\boxed{12} = \boxed{8} + \boxed{?}$$



$$\boxed{12} = \boxed{8} + \boxed{}$$



Remaining oranges in the basket ___.