




NAME \_\_\_\_\_

DATE \_\_\_\_\_

## ADDITION SENTENCES

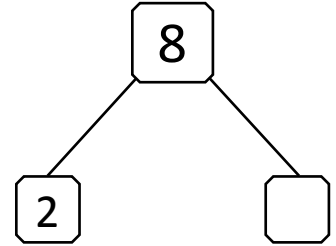
Questions based on thinking and understanding.

- 1) There are 8 birds flying in the sky. 2 birds are red remaining are blue. How many blue birds do you see?




$$\boxed{8} = \boxed{2} + \boxed{?}$$

$$\boxed{8} = \boxed{2} + \boxed{\phantom{0}}$$



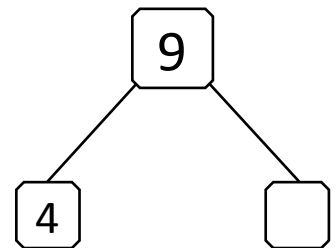
Number of blue birds \_\_\_.

- 2) Among 9 members of the staff in the school only 4 were absent on the day. How many members were present on the day?



$$\boxed{9} = \boxed{4} + \boxed{?}$$

$$\boxed{9} = \boxed{4} + \boxed{\phantom{0}}$$



Number of staff members present \_\_\_.

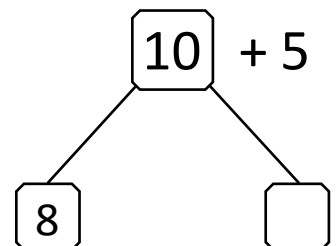
- 3) There are 15 marbles in a small packet Rohit took 8 marbles from it. The remaining have left with packet. How many marbles are there in the packet?



$$\boxed{5} + \boxed{2} = \boxed{\phantom{0}}$$

$$\boxed{15} = \boxed{8} + \boxed{?}$$

$$\boxed{15} = \boxed{8} + \boxed{\phantom{0}}$$



Remaining marbles \_\_\_.