




NAME _____

DATE _____

ADDITIONS


Solve by arranging 5 objects in each group and do addition of the following problems.

1. In a room 13 girls are playing. 8 girls went away. How many girls are left in the room?




Number of girls are left in the room = ____ .

2. There are 16 monkeys playing in the grass. 8 monkeys jumped on to the tree. How many monkeys are still playing in the grass?



Number of monkeys are still playing in the grass = ____ .

3. Oliva counted 17 dogs playing. 8 dogs went to eat. How many dogs are playing?



Number of dogs are playing now = ____ .

4. Milo has 15 cookies. He gave 8 cookies to his sister. How many cookies Milo left with?



Cookies left with Milo = ____ .