



NAME \_\_\_\_\_

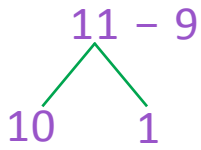
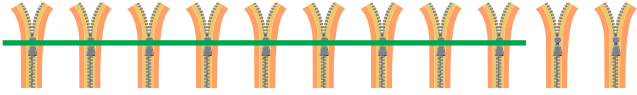
DATE \_\_\_\_\_

# SUBTRACTIONS

Solve using drawings or number bonds.

Example:

$$11 - 9 = \underline{2}$$



$$11 - 9 = 2$$

$$10 - 9 = 1$$

$$1 + 1 = 2$$

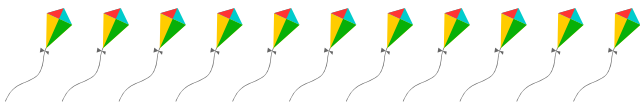
1)  $13 - 8 = \underline{\quad}$



2)  $12 - 9 = \underline{\quad}$



3)  $11 - 8 = \underline{\quad}$



4)  $13 - 7 = \underline{\quad}$

