




NAME _____

DATE _____

SUBTRACTIONS

Solve using drawings or number bonds.


1) $14 - 9 = \underline{\quad}$




2) $12 - 7 = \underline{\quad}$



3) $13 - 9 = \underline{\quad}$



4) $12 - 8 = \underline{\quad}$



5) $14 - 7 = \underline{\quad}$



6) $15 - 8 = \underline{\quad}$

