



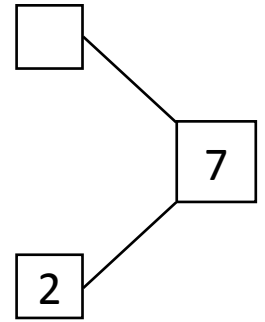
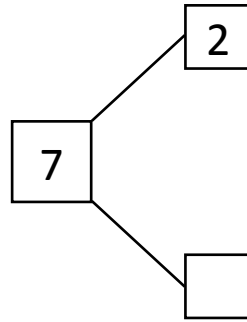
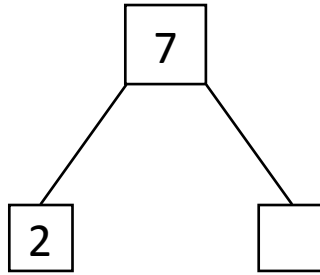
NAME \_\_\_\_\_

DATE \_\_\_\_\_

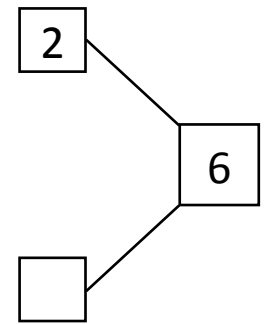
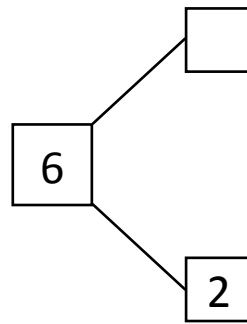
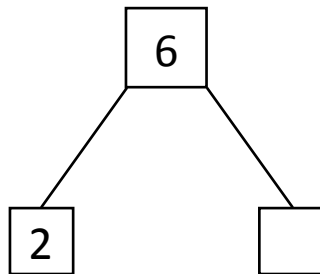
## SUBTRACTIONS

Complete the number bond and number sentences.

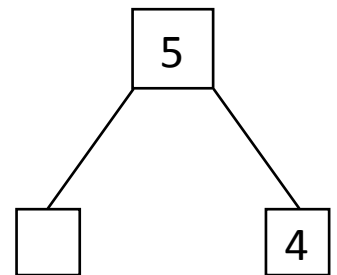
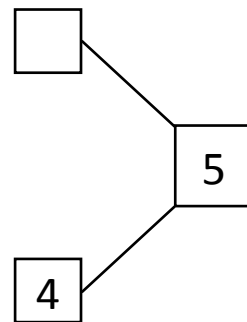
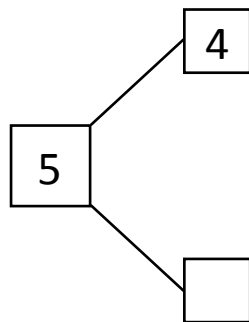
a)  $7 - 2 = \underline{\quad}$



b)  $6 - 2 = \underline{\quad}$



c)  $5 - 4 = \underline{\quad}$



d)  $9 - 1 = \underline{\quad}$

