




NAME _____

DATE _____

SUBTRACTIONS

Solve using drawings or number bonds.


1) $14 - 8 = \underline{\quad}$




2) $15 - 7 = \underline{\quad}$




3) $16 - 8 = \underline{\quad}$



4) $11 - 7 = \underline{\quad}$



5) $17 - 9 = \underline{\quad}$



6) $16 - 7 = \underline{\quad}$

