



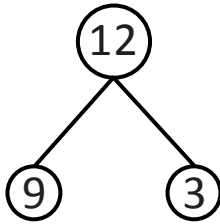
NAME _____

DATE _____

SUBTRACTIONS

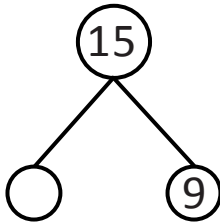
Use 5 groups to complete the number bond. Write the 9- number sentence.

Example:

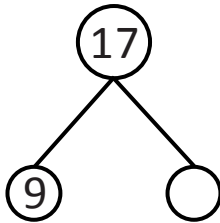


$$12 - 9 = 3$$

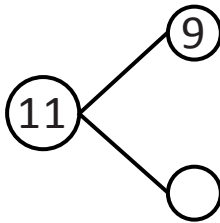
1)



2)



3)



4)

