



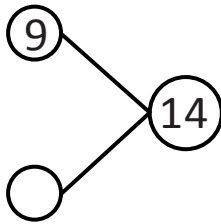
NAME _____

DATE _____

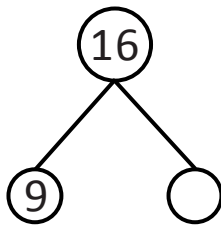
SUBTRACTIONS

Use 5 groups to complete the number bond. Write the 9- number sentence.

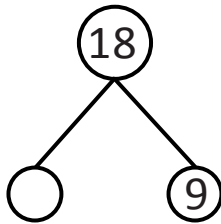
1)



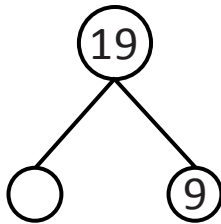
2)



3)



4)



4)

