



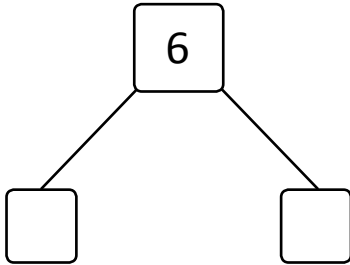
NAME _____

DATE _____

SUBTRACTIONS

Write the subtraction sentences by using number bonds or using images.

a) $6 - 3 = \underline{\quad}$



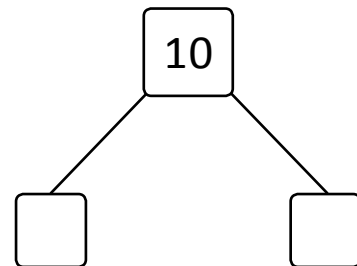
e) $7 - 5 = \underline{\quad}$



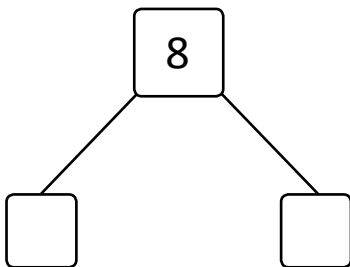
b) $9 - 5 = \underline{\quad}$



f) $10 - 5 = \underline{\quad}$



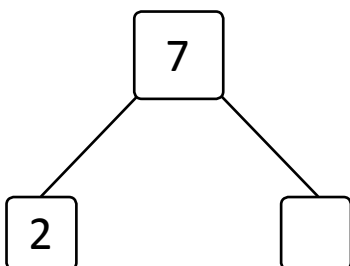
c) $8 - \underline{\quad} = 4$



g) $8 - 5 = \underline{\quad}$



d) $7 - 2 = \underline{\quad}$



h) $9 - 3 = \underline{\quad}$

