



NAME \_\_\_\_\_

DATE \_\_\_\_\_


# SUBTRACTIONS

Round 10 and subtract.


$15 - 8 = \underline{\quad}$




$13 - 8 = \underline{\quad}$



$18 - 8 = \underline{\quad}$



$11 - 8 = \underline{\quad}$



$17 - 8 = \underline{\quad}$

