



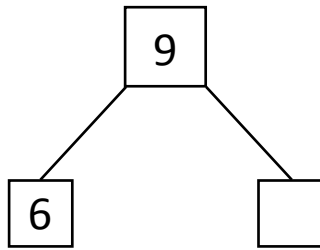

NAME _____

DATE _____

SUBTRACTION WORD PROBLEMS

Make a math drawing and circle the part you know. Cross out the unknown part. Complete the number sentences and number bond.

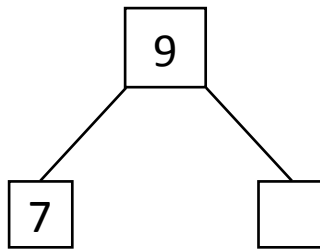
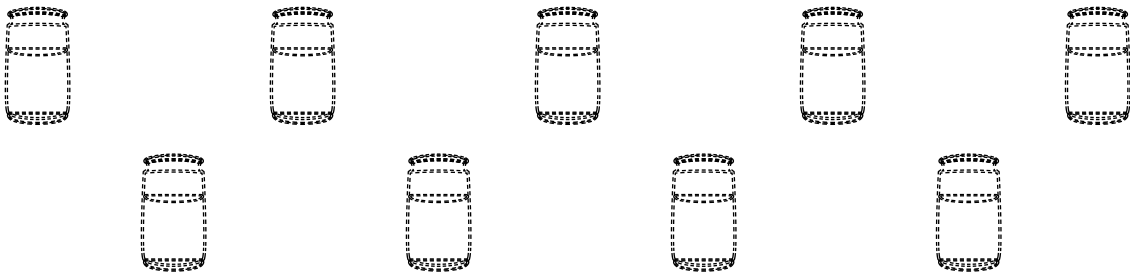
- 1) Ramayya have 9 goats. Some goats missed in the forest. Now Ramayya have 6 goats. How many goats have missed in the forest?



$$\boxed{9} - \boxed{6} = \boxed{}$$

___ goats have missed in the forest.

- 2) The teacher gave 9 tins to the pupils and asked them to arrange in a square type model. After some time some tins fell down. Now there are only 7 tins. How many tins have been fallen ?



$$\boxed{9} - \boxed{7} = \boxed{}$$

___ tins have been fallen.