



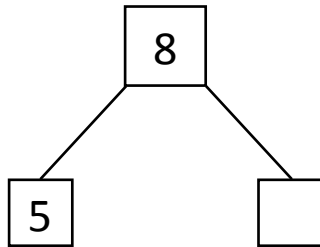
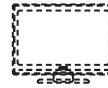
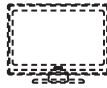
NAME _____

DATE _____

SUBTRACTION WORD PROBLEMS

Make a math drawing and circle the part you know. Cross out the unknown part. Complete the number sentences and number bond.

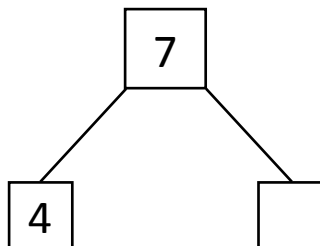
- 1) A trader is selling T.V's. Out of 8 T.V's in the shop, he sold some T.V's. Now there are only 5 T.V's in the shop find how many T.V's the trader sold?



$$\boxed{8} - \boxed{5} = \boxed{}$$

The trader sold ___ T. V's.

- 2) There are 7 buckets in a room. Some buckets have been filled with full water. Only 4 buckets are empty. How many buckets are full with water?



$$\boxed{7} - \boxed{4} = \boxed{}$$

There are only ___ buckets with full water.