

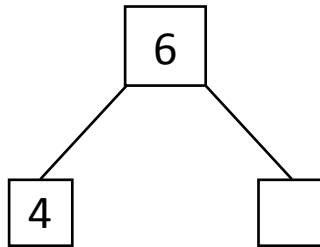



NAME \_\_\_\_\_ DATE \_\_\_\_\_

## SUBTRACTION WORD PROBLEMS

Make a math drawing and circle the part you know. Cross out the unknown part. Complete the number sentences and number bond.

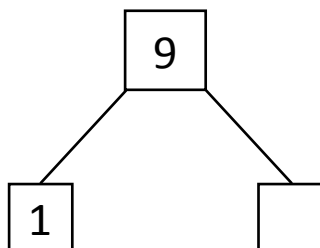
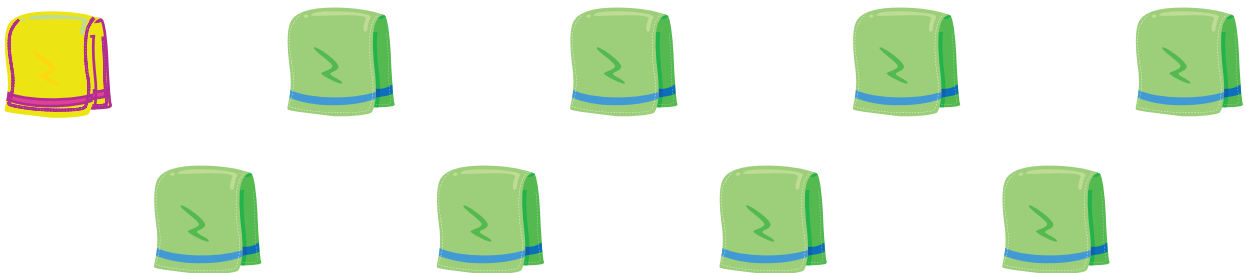
- 1) 6 oranges are there in a basket. Shyam ate some oranges the remaining oranges are 4. How many oranges did Shyam eat?



$$\boxed{6} - \boxed{4} = \boxed{\phantom{0}}$$

Shyam ate \_\_\_ oranges

- 2) 9 sarees have been shown in the exhibition. Some sarees are green in color. Only 1 saree is yellow. How many sarees are green?



$$\boxed{9} - \boxed{1} = \boxed{\phantom{0}}$$

There are \_\_\_ green sarees.