



NAME _____

DATE _____

SUBTRACTION WORD PROBLEMS

Solve using simple math drawings to show how to solve with addition and subtraction. Label the number bond and write a statement.

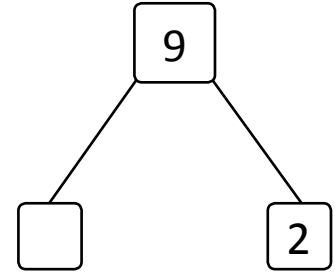
1) In a class room there are 9 charts.

2 are blue charts.


The rest are green.

How many green charts are in the class room?

(Blue charts)



(Green charts)



$$\square + 2 = 9$$

$$9 - 2 = \square$$

There are ___ green charts in the class room.


2) There are 10 apples in the tree.

2 apples fell down on the ground.

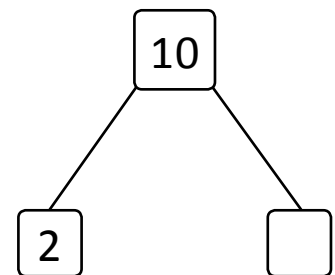
The rest are in the tree.

How many apples are in the tree?

(The rest of the apples)



(Apples fell down)



$$\square + 2 = 10$$

$$10 - 2 = \square$$

The rest of the apples are ___ in the tree.