

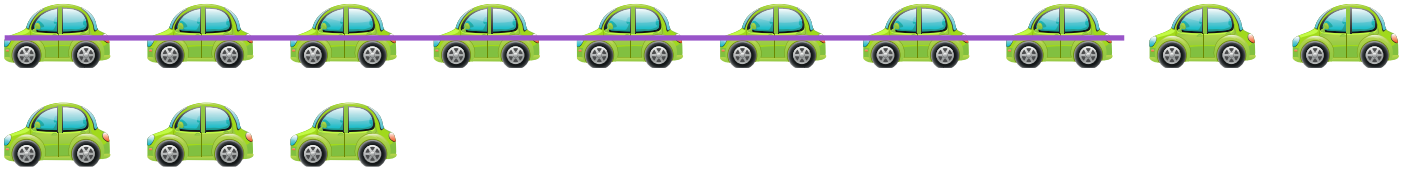


NAME _____ DATE _____

SUBTRACTIONS

See the picture and fill in the math story. Also show in a number sentence.

Example:




There are 13 cars in the parking area. 8 cars went away. How many cars are left?

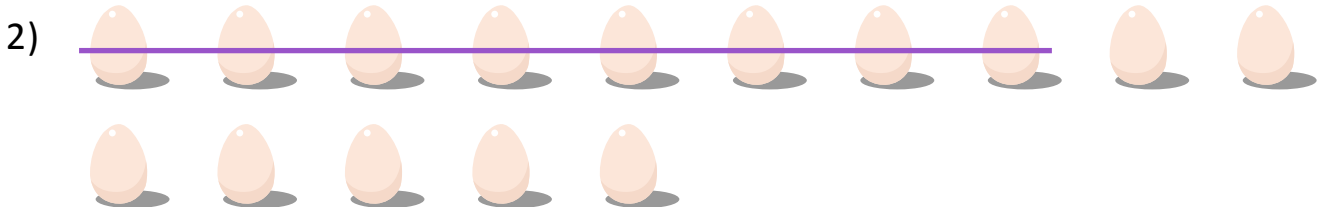
$$13 - 8 = 5$$

$$10 - 8 = 2$$

$$2 + 3 = 5$$



Jim has books in the room. He put books in the shelf. How many book are left in the room?



There are eggs in the nest. eggs fall from nest. How many eggs are left in the nest?