

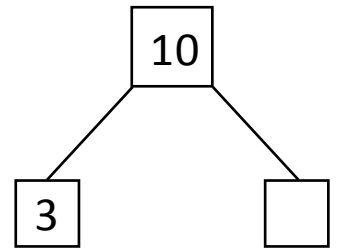



NAME _____ DATE _____

SUBTRACTION WORD PROBLEMS

Read the story. Cross off the items that are leaving the story.
Then complete the number bond, number sentence and number statement.

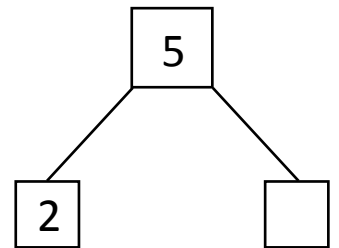
- 1) Lucy has 10 coins. She gave 3 coins to James. How many coins are remaining with Lucy?



$10 - 3 = \underline{\quad}$.

Lucy has coins remaining.

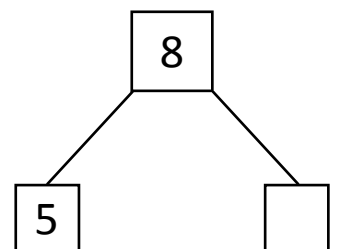

- 2) Jordan has 5 muffins. He ate some muffins and he is left with 2 muffins. How many muffins Jordan ate?



$5 - 2 = \underline{\quad}$.

Jordan ate muffins.

- 3) John has 8 pets. He has 3 puppies and some kittens. How many kittens John is having?



$8 - 3 = \underline{\quad}$.

John is having kittens.