



NAME \_\_\_\_\_

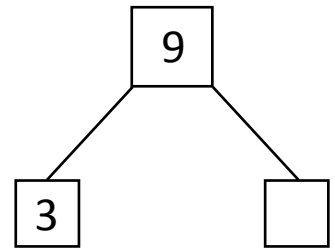
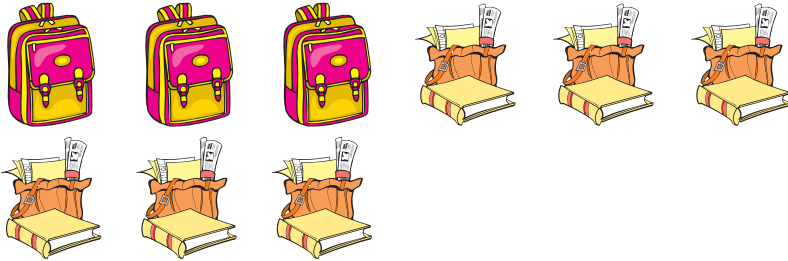
DATE \_\_\_\_\_

## SUBTRACTION WORD PROBLEMS

Read the story. Cross off the items that are leaving the story.

Then complete the number bond, number sentence and number statement.

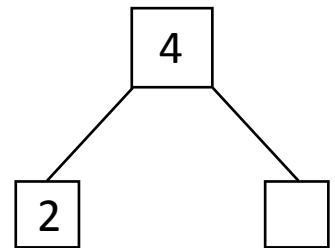
- 1) Peggy has 9 bags in her rack. In some of bags she kept books and in 3 bags she kept her dress. In how many bags Peggy kept books?



$9 - 3 = \underline{\quad}$

Peggy kept books in      bags.

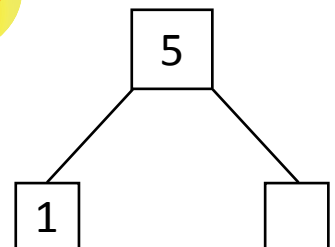

- 2) Rex has 4 dog bones. Some of the dog bones are new and with 2 dog bones Rex played. How many dog bones which Rex have are new?



$4 - 2 = \underline{\quad}$

Rex has      new dog bones.

- 3) Larry has 5 bananas. He ate some bananas. Larry gave 1 banana to his sister. How many bananas did Larry ate?



$5 - 1 = \underline{\quad}$

Larry ate      bananas.