



NAME \_\_\_\_\_

DATE \_\_\_\_\_

## SUBTRACTION WORD PROBLEMS

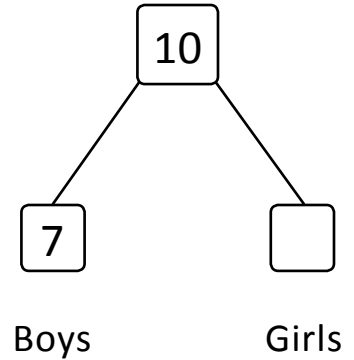
Complete the story and solve. Label the number bond. Complete the missing part in the number sentence and number bond.

1) Number of pupils in a grade 1 class \_\_\_\_.

Number of boys \_\_\_\_.

How many girls are there?

Number of girls \_\_\_\_.



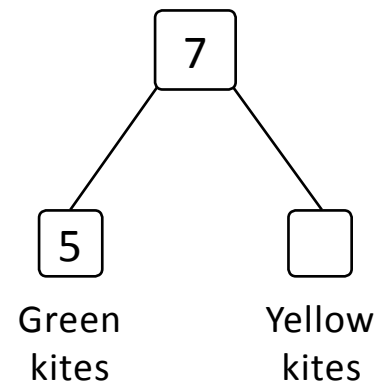
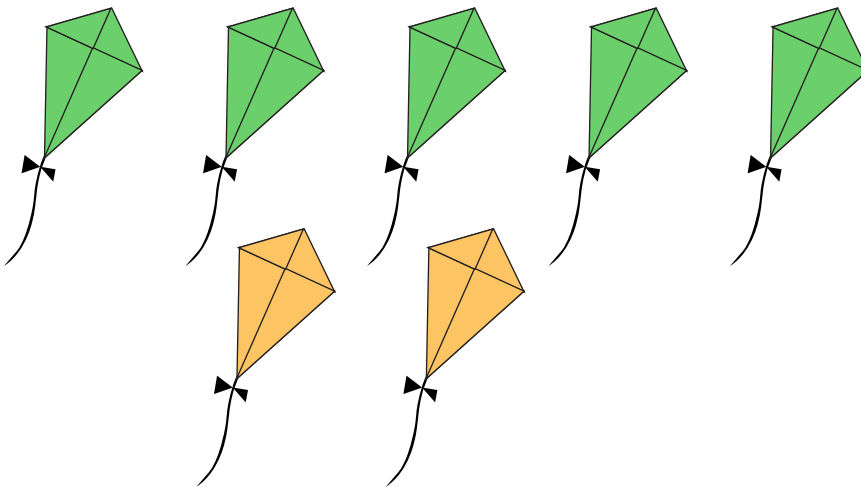
$$10 - 7 = \underline{\quad}$$

2) Number of kites flying in the air \_\_\_\_.

Number of green color kites \_\_\_\_.

How many yellow color kites are there?

Number of yellow color kites \_\_\_\_.



$$7 - 5 = \underline{\quad}$$