



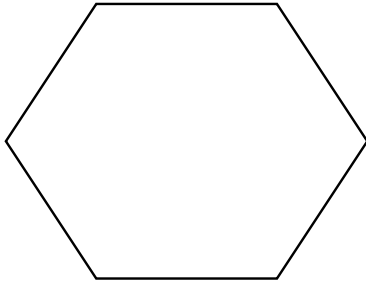
NAME _____

DATE _____

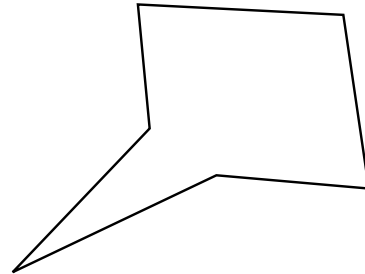
ASSESSMENTS TASK

Time, shapes and fractions as equal parts of shapes.

- 1) Sarah and Henry were asked to draw a hexagon. Sarah believe that only her drawing is correct. Explain why both shapes are hexagons.

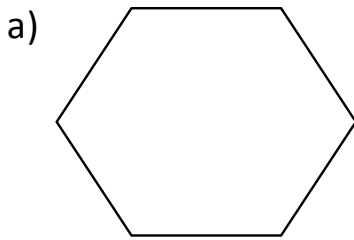


Sarah's hexagon



Henry's hexagon

-
-
- 1) Choose whether the following diagrams regular or irregular hexagons.



Regular hexagon

