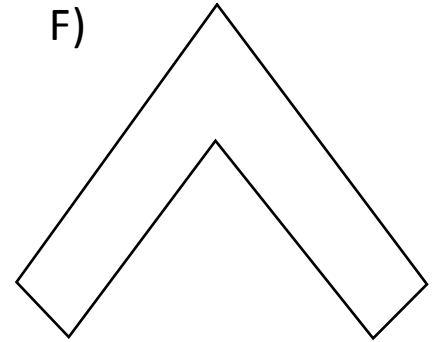
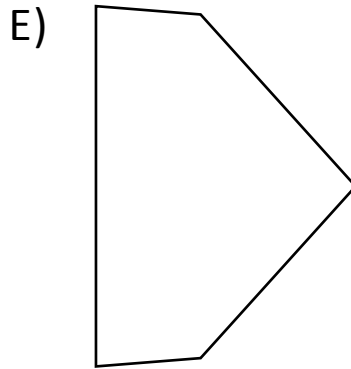
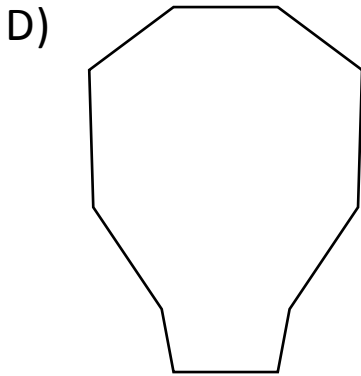
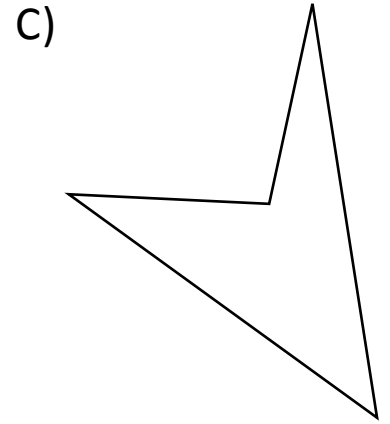
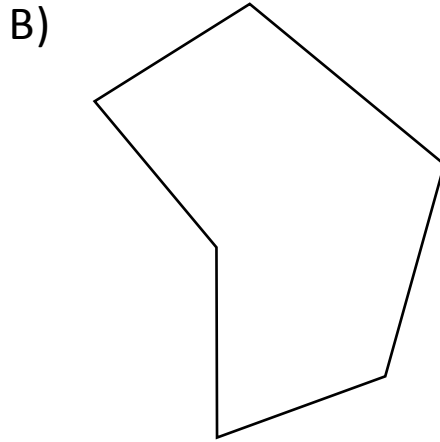
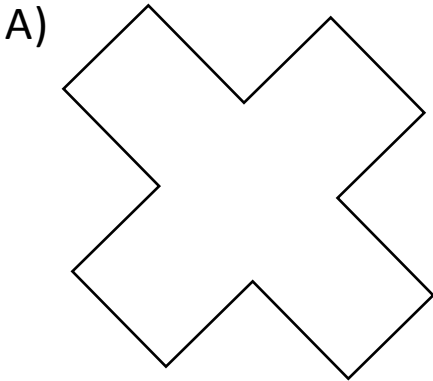




NAME _____ DATE _____

ATTRIBUTES OF GEOMETRY SHAPES

Describe two dimensional shapes based on attributes.



- 1) Which shape have the most angles? ____.
- 2) Which shape have 4 more angles than shape 'F'? ____.
- 3) What shape has 5 fewer sides than shape 'D'? ____.
- 4) How many more angles does shape 'A' have than shape 'B'? ____.
- 5) Which of these shapes have the same number of sides as angles? _____.