



NAME \_\_\_\_\_ DATE \_\_\_\_\_

## COMPOSITE SHAPES & FRACTION CONCEPTS

Interpret shares in composite shapes as halves, thirds and fourths.


**Example:**

Name the pattern block used to cover half the rectangle. Square.

Use the shape below to draw the pattern blocks used to cover 2 halves.



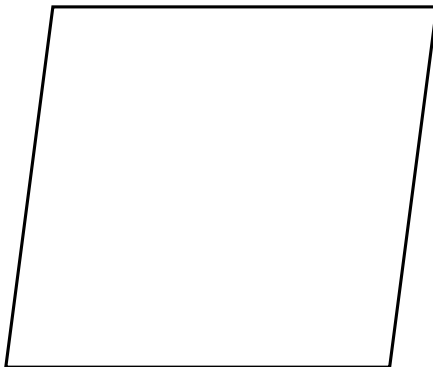
**Answer:**




---

1) Name the pattern block used to cover half the rhombus. \_\_\_\_\_.

Sketch the 2 pattern blocks used to cover both halves of the rhombus.



**Answer:**



---

2) Name the pattern block used to cover half the hexagon? \_\_\_\_\_.

Sketch the 2 pattern blocks used to cover both halves of the hexagon.

**Answer:**

