





NAME _____ DATE _____

UNDERSTAND CONCEPTS ABOUT THE RULER

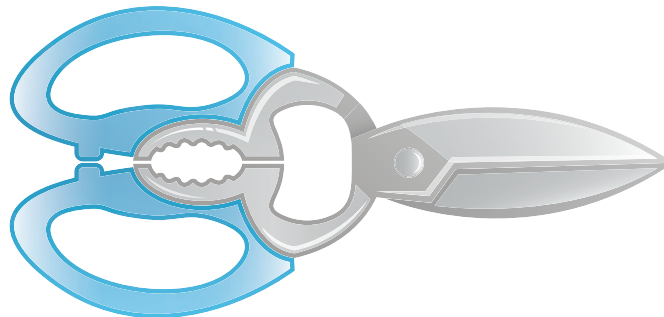

Use iteration with one physical unit to measure.

Find the length of each object using one centimeter cube. Mark the end point of each centimeter cube as you measure.

1) The picture of the lollypop is about ___ centimeter long.



2) The picture of the scissors is about ___ centimeter long.



3) The picture of the animal track is about ___ centimeter long.

