

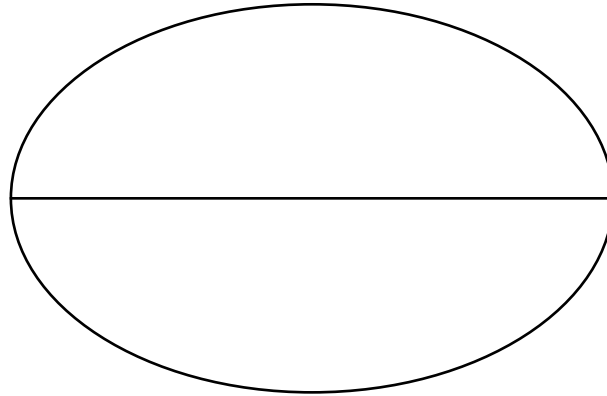


NAME _____ DATE _____

UNDERSTAND CONCEPTS ABOUT THE RULER


Apply concepts to create unit rulers, measure lengths using unit rulers.

1) Find the length across the centre of the circle.



The length across the circle is ___ centimeters.

2) a) The picture of the fish is about ___ centimeter long.

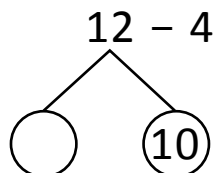


b) The picture of the fish tank is ___ centimeters long.



The picture of the fish tank is ___ centimeters longer than the picture of the fish.

Explanation:



$$= 2 + 10 - 4.$$

$$= 2 + _ = _.$$