



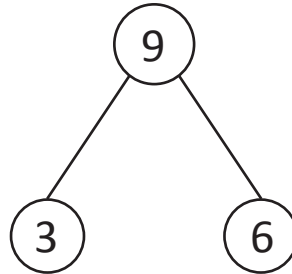
NAME _____ DATE _____

ADDITION/SUBTRACTION

Make number bonds through ten with a subtraction focus and apply to one - step word problems.

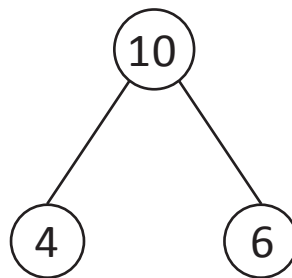
1)

$$3 + \underline{\quad} = 9$$



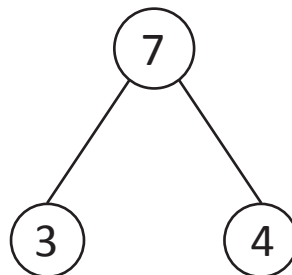
2)

$$4 + \underline{\quad} = 10$$



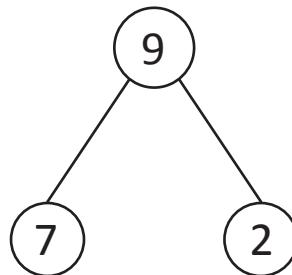
3)

$$4 = 7 - \underline{\quad}$$



4)

$$2 = 9 - \underline{\quad}$$



5)

$$1 = 10 - \underline{\quad}$$

