



NAME _____

DATE _____

ADD OR SUBTRACT

Thought provoking questions.

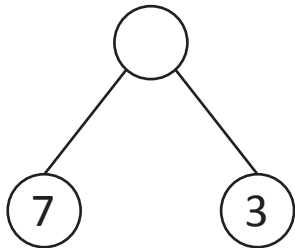
Natasa was given some money for her birthday. She spent \$ 7 on a bow and \$ 3 on a hair clip. If she used all of her money, how much money was Natasa given? Solve using words, match drawings or numbers.

a) Spent on a bow = ____.

For hair clips = ____.

Natasa was given = ____ + ____ = \$ 10

b) By using number bond.

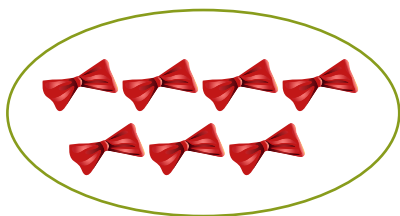


Natasa was given = ____.

$$7 + _ = 10.$$

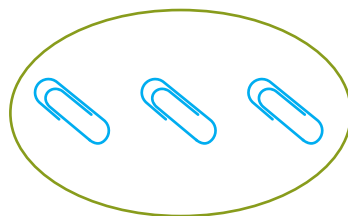
c) By using math drawings.

For bow



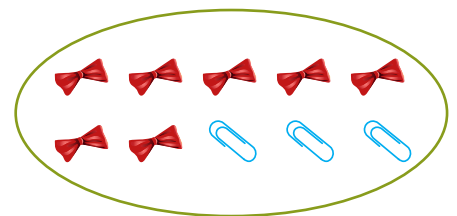
\$ ____

For clip



\$ ____

Total



\$ ____

Natasa was given = ____ + ____ = ____