



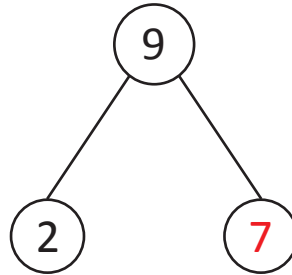
NAME _____ DATE _____

ADDITION/SUBTRACTION

Fill the unknown numbers that make the number sentences true.

Example:

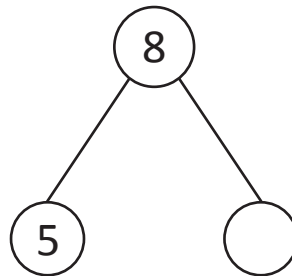
$$9 - 7 = \underline{2}$$



Do the following problems as given in the example.

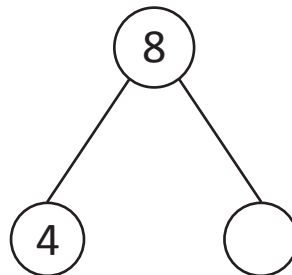
1)

$$8 - 5 = \underline{\quad}$$



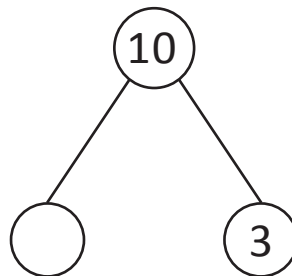
2)

$$8 - 4 = \underline{\quad}$$



3)

$$10 - 7 = \underline{\quad}$$



4)

$$7 - \underline{\quad} = 3$$

