



NAME \_\_\_\_\_

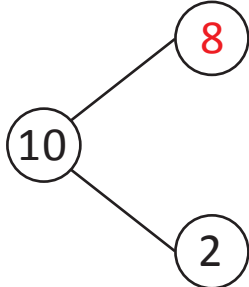
DATE \_\_\_\_\_

## ADD OR SUBTRACT

Complete each number bond to make 10. Write at least one addition and one subtraction sentences to accompany each bond.

Examples:

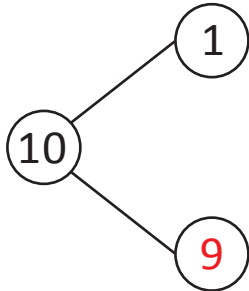
a)



$$8 + 2 = \underline{10}$$

$$10 - 8 = \underline{2}$$

b)

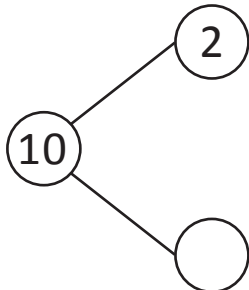


$$1 + 9 = \underline{10}$$

$$10 - 1 = \underline{9}$$

Observe the above examples and complete each number bond same as above.

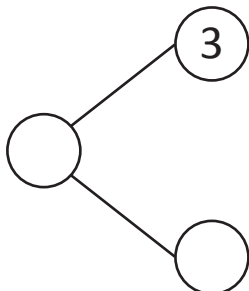
1)



$$\underline{\quad} + 8 = 10$$

$$10 - \underline{\quad} = 2$$

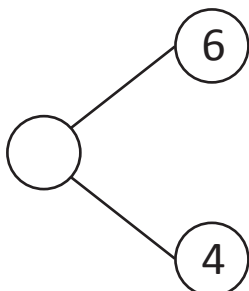
2)



$$3 + \underline{\quad} = 10$$

$$10 - \underline{\quad} = 7$$

3)



$$6 + 4 = \underline{\quad}$$

$$10 - \underline{\quad} = 4$$