



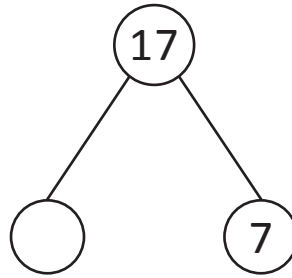
NAME _____ DATE _____

ADDITION/SUBTRACTION

Fill the unknown numbers that make the number sentences true.

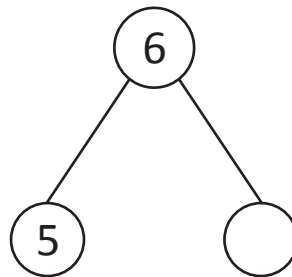
1)

$17 - 10 = \underline{\quad}$



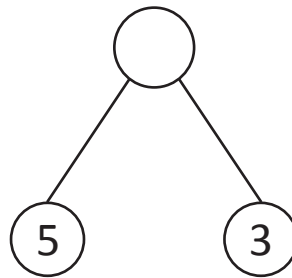
2)

$6 - \underline{\quad} = 1$



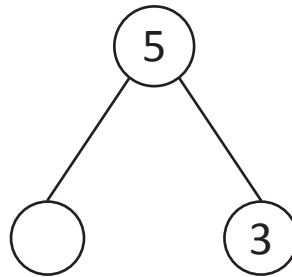
3)

$\underline{\quad} - 5 = 3$



4)

$5 - 2 = \underline{\quad}$



5)

$\underline{\quad} - 6 = 3$

