



NAME _____

DATE _____

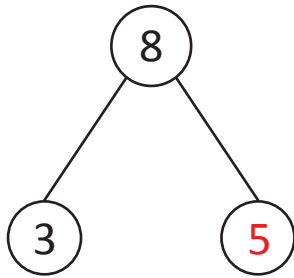
ADDITION/SUBTRACTION

Find the unknown numbers that make the number sentences true.

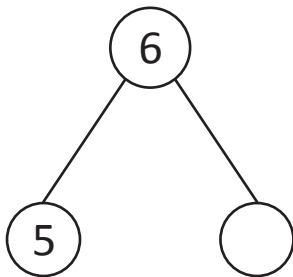
(Make number bonds through ten with a subtraction focus and apply to one - step word problems).

Example:

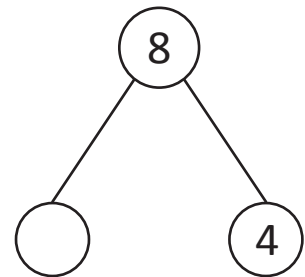
$$8 - 3 = \underline{5}$$



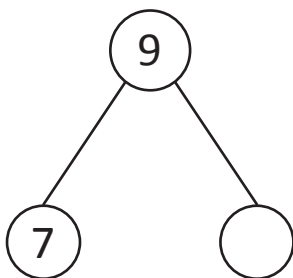
1) $6 - 5 = \underline{\quad}$



3) $8 - \underline{\quad} = 4$



2) $7 + \underline{\quad} = 9$



4) $10 - 2 = \underline{\quad}$

