



NAME _____

DATE _____

ADDITION/SUBTRACTION

Problem solving and understanding questions.

There are 10 cows and 7 bulls and 2 dogs are in the farm house. How many total animals are there in the farm show your thinking using words, math drawing or a number sentence.

Using words:

Cows in the farm = ____.

$$10 + 7 + 2$$

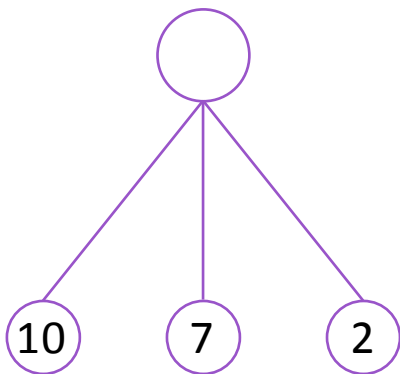
Bulls in the farm = ____.

$$10 + 9$$

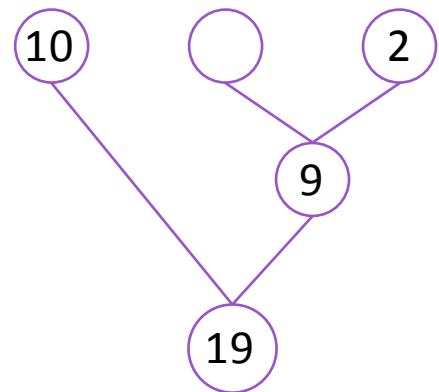
Dogs in the farm = ____.

$$= \underline{\quad}$$

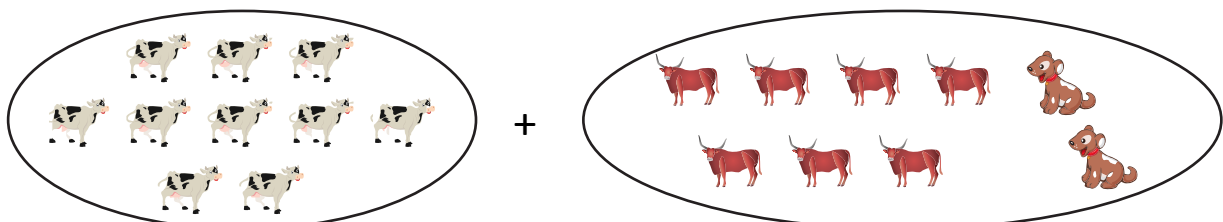
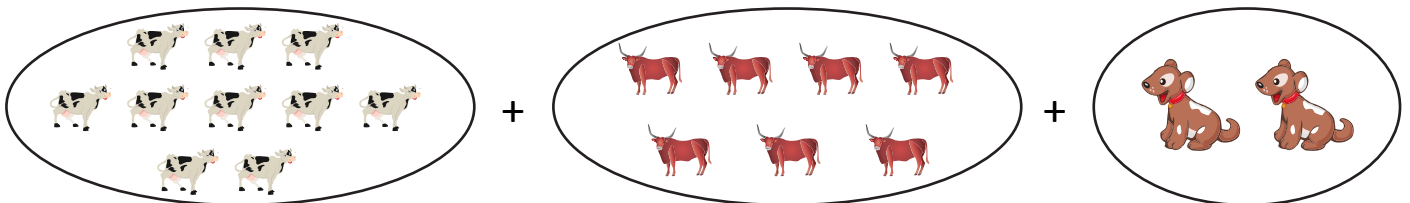
Using number bond:



$$10 + (7 + 2)$$



Math drawings:



$$\text{Total animals} = 10 + 9 = \underline{\quad}.$$