



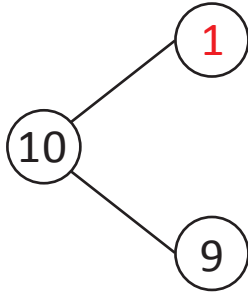
NAME _____

DATE _____

ADD OR SUBTRACT

By using the number bonds subtract the following.

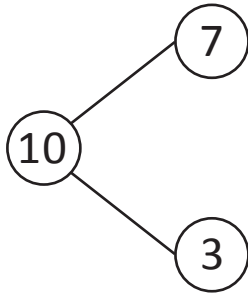
Example:



$$10 - \underline{9} = \underline{1}$$

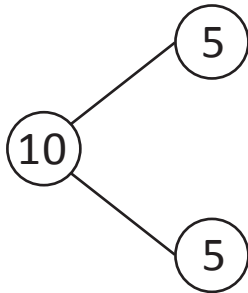
Do the following subtractions as given in the above example.

1)



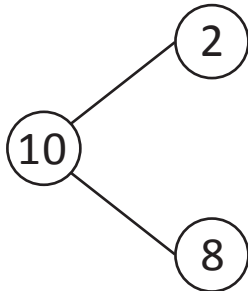
$$\underline{\quad} - 7 = \underline{\quad}$$

2)



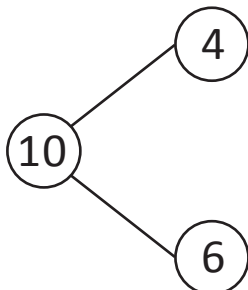
$$\underline{\quad} - 5 = \underline{\quad}$$

3)



$$10 - \underline{\quad} = 2$$

4)



$$10 - \underline{\quad} = 6$$