



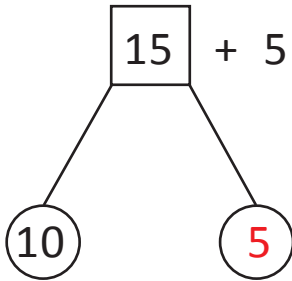
NAME _____

DATE _____

ADD OR SUBTRACT

Solve the problems by using the number bonds.

Example:

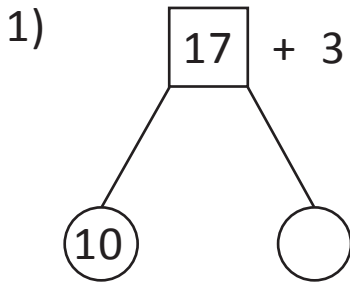


$$= 5 + 5 = \underline{10}$$

$$= 10 + 10$$

$$= \underline{20}$$

$$15 + 5 = \underline{20}$$

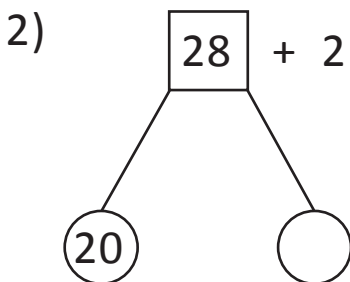


$$= 7 + 3 = \underline{\quad}$$

$$= 10 + 10$$

$$= \underline{\quad}$$

$$17 + 3 = \underline{\quad}$$

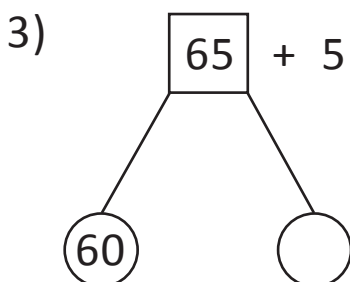


$$= 8 + \underline{\quad} = 10$$

$$= 20 + 10$$

$$= \underline{\quad}$$

$$28 + 2 = \underline{\quad}$$



$$= 5 + \underline{\quad} = 10$$

$$= 60 + 10$$

$$= \underline{\quad}$$

$$65 + 5 = \underline{\quad}$$