






NAME _____




DATE _____

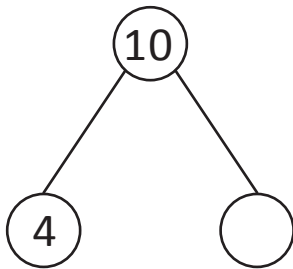
ADD OR SUBTRACT

Solve the problems by using the number bonds.

Amy read 24 books. Peter read 30 books. Amy wants to read as many books as Peter. Amy thinks she needs to read 7 more books to reach her goal. Is she right? Explain using words, math drawings, or numbers.

Amy read books = ____ =  +  + 

Peter read books = ____ =  +  + 



$$4 + \underline{\quad} = 10$$

Amy need not read 7 more books to reach Peter's goal.

She has to read ____ books only.

$$30 - 24$$

$$\textcircled{10} + \textcircled{10} + \textcircled{10} - \textcircled{10} - \textcircled{10} - \textcircled{4}$$

$$10 - 4 = \underline{\quad}$$