



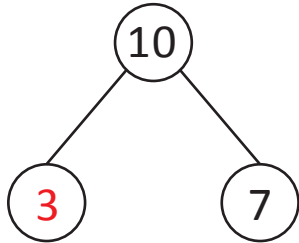
NAME _____

DATE _____

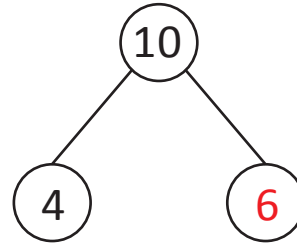
ADD OR SUBTRACT

Subtract and complete the number bond for each set.

Examples:

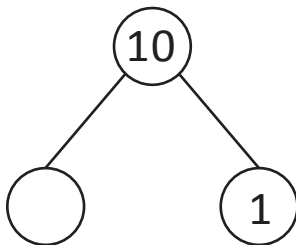


$$10 - \underline{7} = 3$$



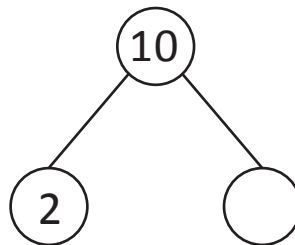
$$10 - \underline{4} = 6$$

1)



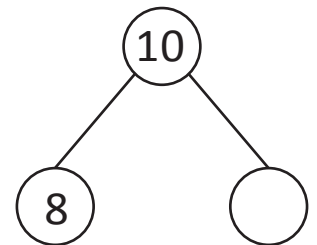
$$10 - 1 = \underline{\quad}$$

4)



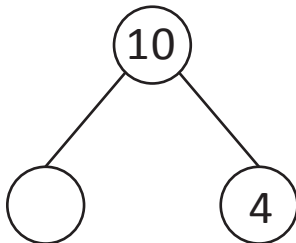
$$10 - 2 = \underline{\quad}$$

7)



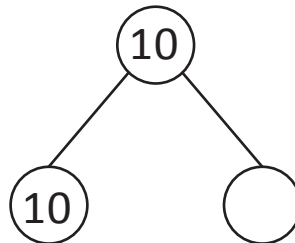
$$10 - 8 = \underline{\quad}$$

2)



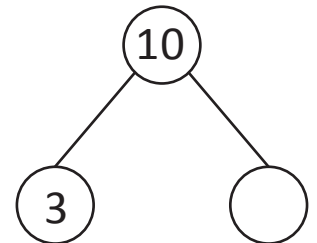
$$10 - 4 = \underline{\quad}$$

5)



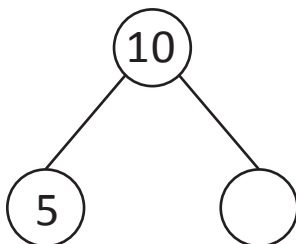
$$10 - 10 = \underline{\quad}$$

8)



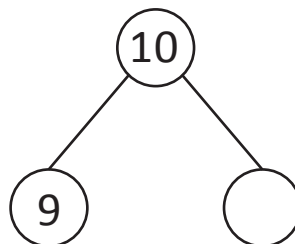
$$10 - 3 = \underline{\quad}$$

3)



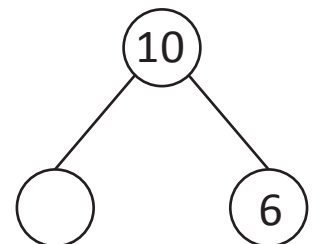
$$10 - 5 = \underline{\quad}$$

6)



$$10 - 9 = \underline{\quad}$$

9)



$$10 - 6 = \underline{\quad}$$